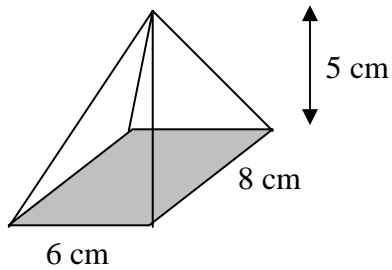


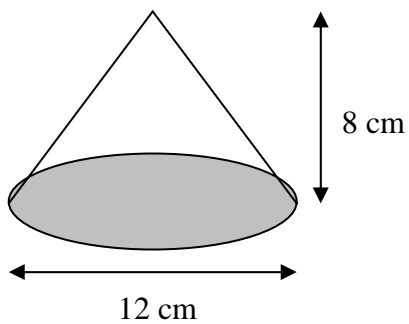
Volume of Cones, Pyramids, Spheres

Find the volume of each figure by applying the formula $\text{Volume} = (\text{Base Area}) \times \text{Height} \div 3$.

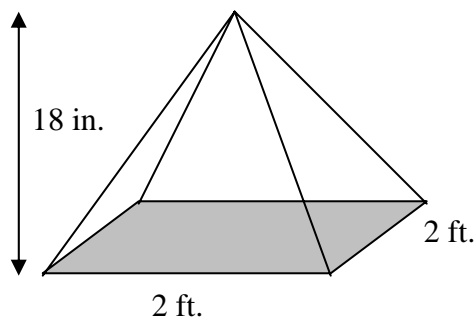
[1]



[2]



[3]

[4] Use the formula $\text{Volume} = \frac{4}{3} \pi r^3$ 